

2nd GRADE

Hello Families,

We are so excited to meet you this fall! Here are some of the skills and tasks we would like students to work on over the summer to be prepared for second grade.

Language Arts

Read aloud to an adult for at least ten minutes a day.

Identify consonants and vowels, and sort them accordingly.

Read basic short vowel words and long vowel words.

Read words with blends (bl, cl, mp, etc.) and digraphs (sh, ch, th, etc).

Do 30 minutes of Lexia per week.

Writing

Write complete sentences using describing words.

Use correct capitalization and punctuation in your sentences.

MATH

Add and subtract fluently within 20.

Identify coins, and know their value.

Tell time to the hour and half hour.

Skip count by 2's, 5's, and 10's, starting at any number.

Count backward from any number between 0 and 50

Do 30 minutes of i-Ready Math per week.



We attached some examples and practice pages. We hope they will help you keep learning over the summer.

Love,

The 2nd Grade Teachers

Name _____ Date _____

vowels and consonants

vowels

consonants

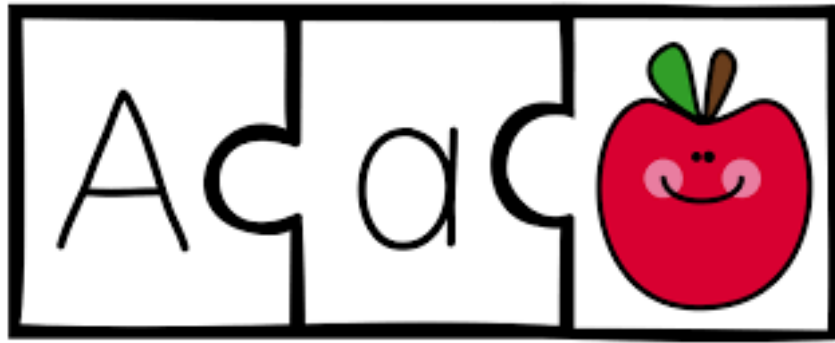


d n i t m g q e o

k p r b u w j x z

f a y v h l c s

Bonus: Think of a word that begins with each vowel. Use each word in a sentence.



Short Vowel Words

<u>Short a</u>	<u>Short e</u>	<u>Short i</u>	<u>Short o</u>	<u>Short u</u>
act	ben	bin	bog	bun
bat	beg	big	cod	bus
cap	fed	dim	cot	bug
dab	gem	did	dot	cut
fan	hen	fin	got	fun
gap	led	him	jog	gum
has	pen	his	lot	hum
jam	peg	jig	lop	hug
lad	set	kin	mop	jug
mad	vet	kid	nod	lug
nap	yet	lid	odd	mug
pal	wet	pin	pod	nut
ram		rim	rod	pup
sad		sit	top	rub
tag		tip		run
van		win		sun
zap		zip		tug

Words with silent e


bake	bite	bone	cube
cake	dice	cone	cure
came	dime	core	cute
cane	fine	hole	dude
cape	fire	home	dune
date	hide	hope	huge
face	hike	hose	mule
gate	kite	joke	mute
haze	life	mope	pure
jade	lime	note	rule
lake	mice	robe	tube
made	mine	rope	
name	nine	rose	
page	pine	vote	
rake	rice	woke	
safe	ride		
take	time		
vase	wide		
wake	wire		
wave			

Words with blends

blue	clam	jump
glass	play	brat
slap	milk	crab
belt	broom	dress
cry	drum	frog
desk	star	drip
wasp	swing	drop

Words with diagraphs

ship	cash	chef
much	with	shell
shut	chin	rich
thin	bath	path
whip	where	which
chew	such	mash
fish	wish	she



Author _____


.....

.....


.....

.....

.....



Watch Your Step



How many ladders would it take to get to the sun?

A.

$$\begin{array}{r} 8 \\ +3 \\ \hline \end{array}$$

$$\begin{array}{r} 3 \\ +8 \\ \hline \end{array}$$

$$\begin{array}{r} 11 \\ -8 \\ \hline \end{array}$$

B.

$$\begin{array}{r} 11 \\ -3 \\ \hline \end{array}$$

$$\begin{array}{r} 8 \\ +4 \\ \hline \end{array}$$

$$\begin{array}{r} 4 \\ +8 \\ \hline \end{array}$$

$$\begin{array}{r} 12 \\ -8 \\ \hline \end{array}$$

$$\begin{array}{r} 12 \\ -4 \\ \hline \end{array}$$

$$\begin{array}{r} 5 \\ +8 \\ \hline \end{array}$$

$$\begin{array}{r} 8 \\ +5 \\ \hline \end{array}$$

$$\begin{array}{r} 13 \\ -8 \\ \hline \end{array}$$

C.

$$\begin{array}{r} 13 \\ -5 \\ \hline \end{array}$$

$$\begin{array}{r} 6 \\ +8 \\ \hline \end{array}$$

$$\begin{array}{r} 8 \\ +6 \\ \hline \end{array}$$

$$\begin{array}{r} 14 \\ -8 \\ \hline \end{array}$$

$$\begin{array}{r} 14 \\ -6 \\ \hline \end{array}$$

$$\begin{array}{r} 7 \\ +8 \\ \hline \end{array}$$

$$\begin{array}{r} 8 \\ +7 \\ \hline \end{array}$$

$$\begin{array}{r} 15 \\ -8 \\ \hline \end{array}$$

D.

$$\begin{array}{r} 15 \\ -7 \\ \hline \end{array}$$

$$\begin{array}{r} 8 \\ +8 \\ \hline \end{array}$$

$$\begin{array}{r} 16 \\ -8 \\ \hline \end{array}$$

$$\begin{array}{r} 8 \\ +9 \\ \hline \end{array}$$

$$\begin{array}{r} 9 \\ +8 \\ \hline \end{array}$$

$$\begin{array}{r} 17 \\ -8 \\ \hline \end{array}$$

$$\begin{array}{r} 17 \\ -9 \\ \hline \end{array}$$

$$\begin{array}{r} 10 \\ +8 \\ \hline \end{array}$$

E.

$$\begin{array}{r} 8 \\ +10 \\ \hline \end{array}$$

$$\begin{array}{r} 18 \\ -8 \\ \hline \end{array}$$

$$\begin{array}{r} 18 \\ -10 \\ \hline \end{array}$$

$$\begin{array}{r} 1 \\ +8 \\ \hline \end{array}$$

$$\begin{array}{r} 8 \\ +1 \\ \hline \end{array}$$

$$\begin{array}{r} 9 \\ -8 \\ \hline \end{array}$$

$$\begin{array}{r} 9 \\ -1 \\ \hline \end{array}$$

$$\begin{array}{r} 8 \\ +8 \\ \hline \end{array}$$

F.

$$\begin{array}{r} 8 \\ -0 \\ \hline \end{array}$$

$$\begin{array}{r} 11 \\ -8 \\ \hline \end{array}$$

$$\begin{array}{r} 13 \\ -8 \\ \hline \end{array}$$

$$\begin{array}{r} 15 \\ -8 \\ \hline \end{array}$$

$$\begin{array}{r} 17 \\ -8 \\ \hline \end{array}$$

$$\begin{array}{r} 12 \\ -8 \\ \hline \end{array}$$

$$\begin{array}{r} 14 \\ -8 \\ \hline \end{array}$$

$$\begin{array}{r} 16 \\ -8 \\ \hline \end{array}$$



Answer: One—if it's 93 million miles long!



Skip Counting

2.NBT.A.2

Skip Count by 2s	22				
------------------------	----	--	--	--	--

Skip Count by 5s	15				
------------------------	----	--	--	--	--

Skip Count by 10s	38				
-------------------------	----	--	--	--	--

Skip Count by 2s	3				
------------------------	---	--	--	--	--

Skip Count by 5s	43				
------------------------	----	--	--	--	--

Skip Count by 10s	51				
-------------------------	----	--	--	--	--

Name: _____

Date: _____

Coin Quiz



What is the name of this coin? _____

What is the value of this coin? _____



What is the name of this coin? _____

What is the value of this coin? _____



What is the name of this coin? _____

What is the value of this coin? _____



What is the name of this coin? _____

What is the value of this coin? _____

Match the back of each coin to its name.












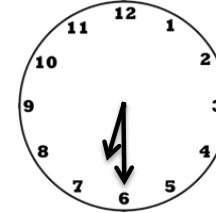
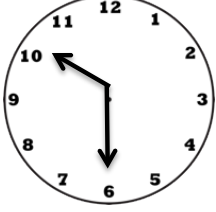
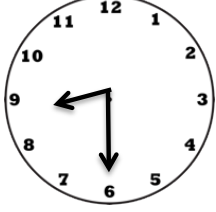



quarter

dime

penny

nickel

WRITE THE TIME SHOWN.

 <input type="text"/>	 <input type="text"/>	 <input type="text"/>	 <input type="text"/>	 <input type="text"/>
 <input type="text"/>	 <input type="text"/>	 <input type="text"/>	 <input type="text"/>	 <input type="text"/>
 <input type="text"/>	 <input type="text"/>	 <input type="text"/>	 <input type="text"/>	 <input type="text"/>